

Grade 1 Mid-Point Math Check-up

(Student Copy)

Name: _____

Paper/Pencil Section

Tell us what you thought! After each section, circle a happy or sad face.

If the question was easy, circle the smile!

If the question was hard, circle the frown!



Easy



Hard

1. Circle the number that is 1 more.

4

5

8

10

11

15

4

12

18

19

10

9

7

10

8

2

13

12

19

14



Easy



Hard

2. Circle the number that is 1 less.

5

4

9

2

8

3

12

7

12

14

11

9

19

13

18

20

10

11

9

8



Easy



Hard

3. Draw a picture to show the number 7.



Easy



Hard

4. Draw 16 circles. **THEN** use the place value boxes to show how many tens and ones are in the number 16.

	<table><tr><td data-bbox="954 604 1122 877">Tens <input type="text"/></td><td data-bbox="1192 604 1359 877">Ones <input type="text"/></td></tr></table>	Tens <input type="text"/>	Ones <input type="text"/>
Tens <input type="text"/>	Ones <input type="text"/>		



Easy



Hard

5. Add the following.

(Allow the students access to a manipulative if they require one)

$6+2= \underline{\hspace{2cm}}$

$5+8= \underline{\hspace{2cm}}$

$$\begin{array}{r} 3 \\ + 4 \\ \hline \end{array}$$

$$\begin{array}{r} 11 \\ + 6 \\ \hline \end{array}$$



Easy



Hard

6. Subtract the following.

(Allow the students access to a manipulative if they require one)

(Students are not required to regroup)

$9-5=$ _____

$6-4=$ _____

$$\begin{array}{r} 10 \\ - 6 \\ \hline \end{array}$$

$$\begin{array}{r} 15 \\ - 4 \\ \hline \end{array}$$



Easy



Hard

7. Problem Solving

Find the answer by drawing a picture, writing a number sentence, or using your own method.

(Read each of the following problems twice. After this point you may answer a student's specific questions.)

There were 7 lions playing at the zoo. 3 lions fell asleep. How many lions are still playing?



Easy



Hard



You had 10 pencils in your pencil case, but you lost 5. How many pencils do you have left?



Easy



Hard

6 students ordered chocolate milk today, but there were only 4 chocolate milks left. How many students didn't get chocolate milk today?



Easy



Hard

Your cookie has 3 chocolate chips and mine has 8. How many chocolate chips do we have all together?



Easy



Hard




There were 3 friends playing on the playground. 2 more friends came along and joined the game. Then 2 more friends came along and joined the game. How many people were playing all together?




Easy




Hard



Make copies for individual students and/or as an overhead.



Make copies for individual students and/or as an overhead.



Make copies for individual students and/or as an overhead.

86 27

53